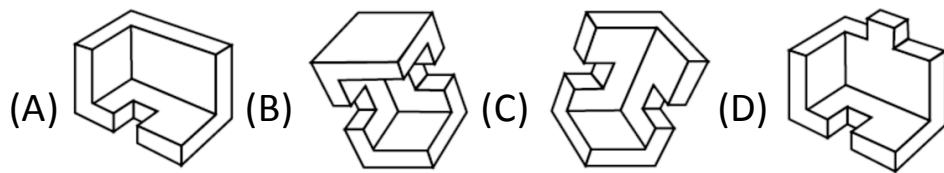
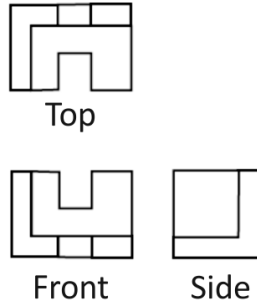
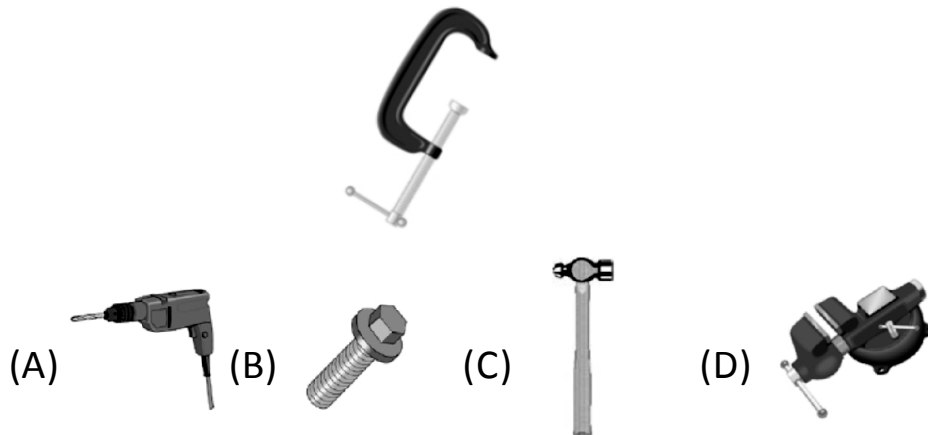


18. Identify the 3-dimensional object from the given three views.



19. Recognize the tool in the question and choose the most closely related tool or object from the given choices.



**20. Three pencils cost the same as two erasers.
Four erasers cost the same as one ruler.
Pencils are more expensive than rulers.
If the first two statements are true, the third statement is**

(A) True (B) False
(C) Uncertain (D) None of these